



Name _____

Date _____

Class: 1st

MM: 50

Mock Test 2

Subject: Computer

Chapter 5: Using Paint

Q.1 A. Choose the correct option.




(4x0.5=2)

1. What is the function of fill with colour tool?

- a) Draw line
- b) Draw circle
- c) Fill colour
- d) Draw shape

2. Which of the following tools is used in drawing the given shape?



- a) 
- b) 
- c) 
- d) None of these

3. _____ tool is used for drawing thick lines.

- a) Line
- b) Brush
- c) Curve
- d) Pen

4. Which one of the following is not a tool in Paint?

- a) Magnifier
- b) Pen
- c) Pencil
- d) Eraser

Q.1 B. Fill in the blanks.

(5x1=5)

- a) _____ tool is used to make freehand drawings.
- b) _____ shows the name of the drawing.
- c) Fill with colour tool can be used to fill colours in _____ figure.
- d) _____ contains all tools.
- e) _____ shape is used to draw shapes like rectangle and square.



Q.1 C. Write T for True and F for False.

(6x0.5=3)

- a) A paint is a drawing program. _____
- b) The oval tool is used to draw a line. _____
- c) At the left of title bar, there is the Quick Access Toolbar. _____
- d) Curve tool is used to draw curved lines. _____
- e) Pencil tool works like a sprayer. _____
- f) There are many shapes present in the shapes group. _____

Q.1 D. Neha wants to draw a picture. Help her match with the appropriate tool.


(4x1=4)

- a) To draw an circle
- b) To draw a square
- c) To draw a straight line
- d) To draw a brush stroke



Q.1 E. Describe the picture in one word.

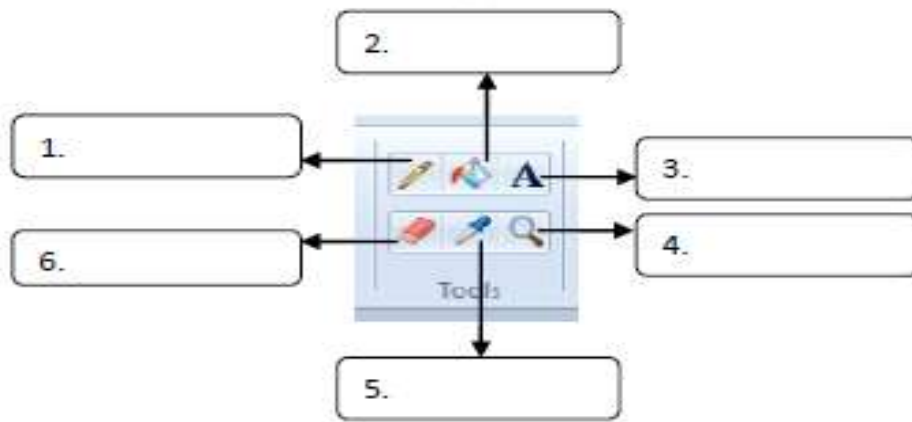
(2x1=2)





Q.2 A. Look at the picture and label any 5.

(5x1=5)



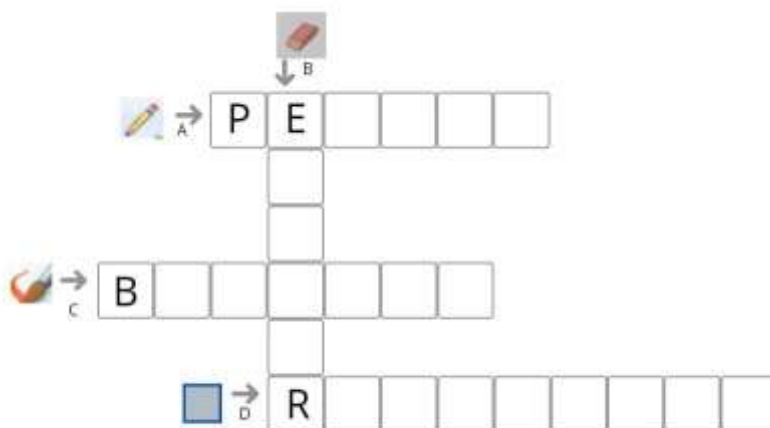
Q.2 B. Unscramble the words.

(4x1=4)

- a) _____ (OALV TLOO)
- b) _____ (MGANIFERI)
- c) _____ (PNECIL TLOO)
- d) _____ (ESERAR TLOO)

Q.3 With the help of picture clues, complete the crossword.

(4x1=4)





Q.4 Answer the following questions.

- a) Define Paint. (2)

- b) Name any three shapes present in the shapes group. (3)

- c) Write the parts of Paint window? (2)

Q.5 Reading Comprehension. (4)

The title bar shows the name of the drawing. At the left of the title bar, there is the Quick Access Toolbar. The ribbon contains all the tools and commands. It has two tabs. Home and View. The tools and shapes group on the home tab provides various tools.

Answer the following questions based on above comprehension.

- a) Name the two tabs present on Ribbon.

- b) Which part of paint window is present at the left of title bar?



c) Which bar shows the name of the drawing?

d) Ribbon contains _____ and _____.

Q.6 Listening comprehension.

(4)

Listen to the audio and answer the following questions.

<https://youtu.be/1Tys30Qg3zU>

a) What is the use of Rectangle tool?

b) Which tool allows you to fill any closed object with a selected colour?

c) Which tool is used to erase or remove any part of the drawing?

d) Which tool allows you to make freehand drawings?

Q.7 Encircle the correct spelling.

(6x0.5=3)

a) Eraser tool / Ereser tool



- b) Quicck Access Toolbar / Quick Access Toolbar
- c) Ribon / Ribbon
- d) Commands / Comands
- e) Brushes / Brusshes
- f) Ovel/ Oval

Q.8 Record a video of yourself by showing “How to save a file in Paint” and upload on the school app. (3)